

Physical Education  
Component 2: Health and Performance

Friday 15 May 2020 – Afternoon

Diagram Booklet

In the boxes below, write your name, centre number and candidate number.

Surname					
Other names					
Centre Number					
Candidate Number					

**INSTRUCTIONS**

There may be spare copies of some diagrams in case you need them.

**THIS DIAGRAM BOOKLET *MUST* BE RETURNED WITH THE  
QUESTION PAPER AT THE END OF THE EXAMINATION.**

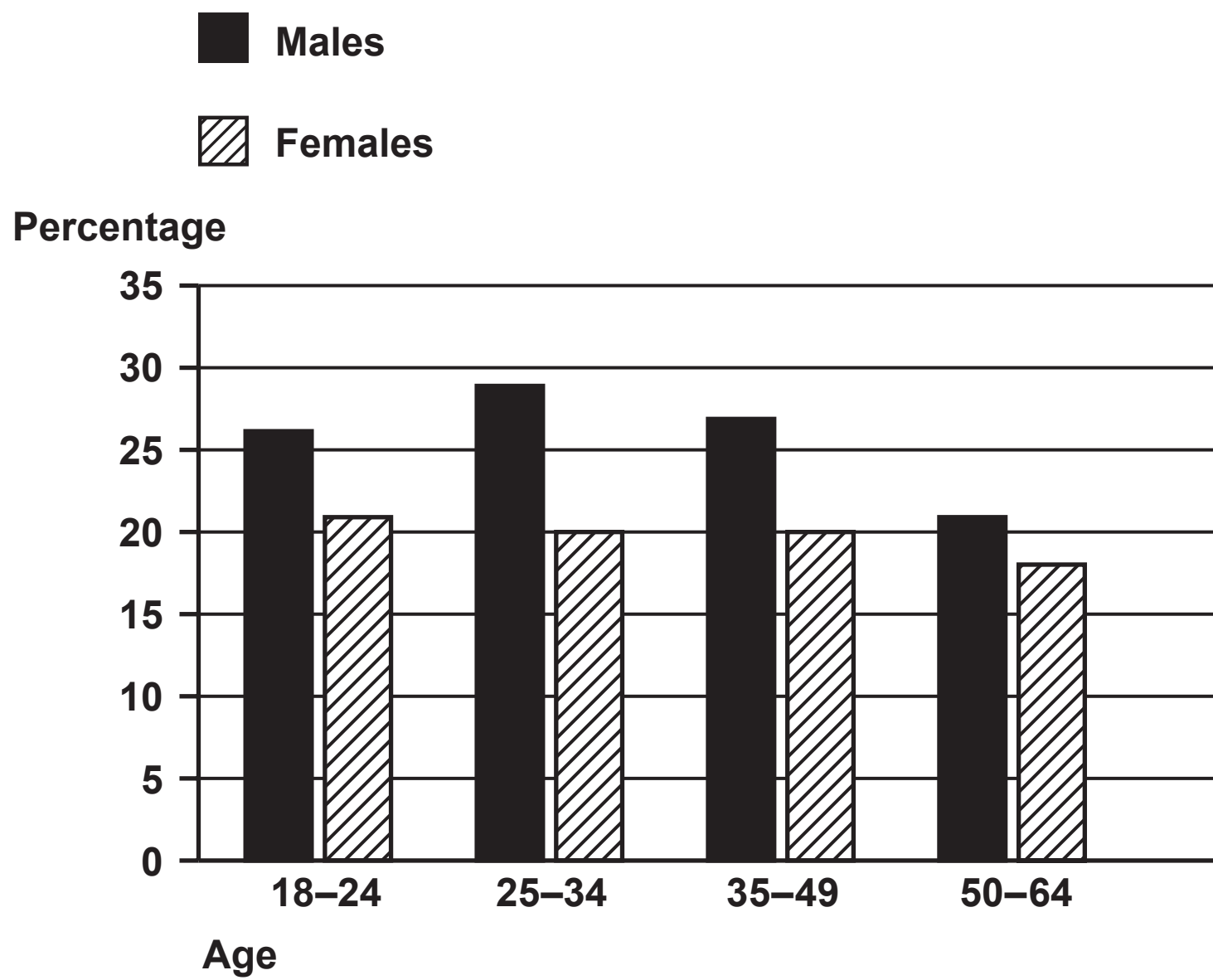
## Contents

### Page

4	Question 1(e) and 1(f)
5	Question 2
6	Question 2 (Spare copy)
7	Question 5(a)
8	Question 6
9	Question 6(a)
10	Question 6(a) (Spare copy)
11	Question 8
12	Question 9

## Question 1(e) and 1(f)

FIGURE 1



Question 2

TABLE 1

(a) Social benefit of regular participation	(b) How each social benefit is achieved
(1 mark)	(1 mark)
(1 mark)	(1 mark)

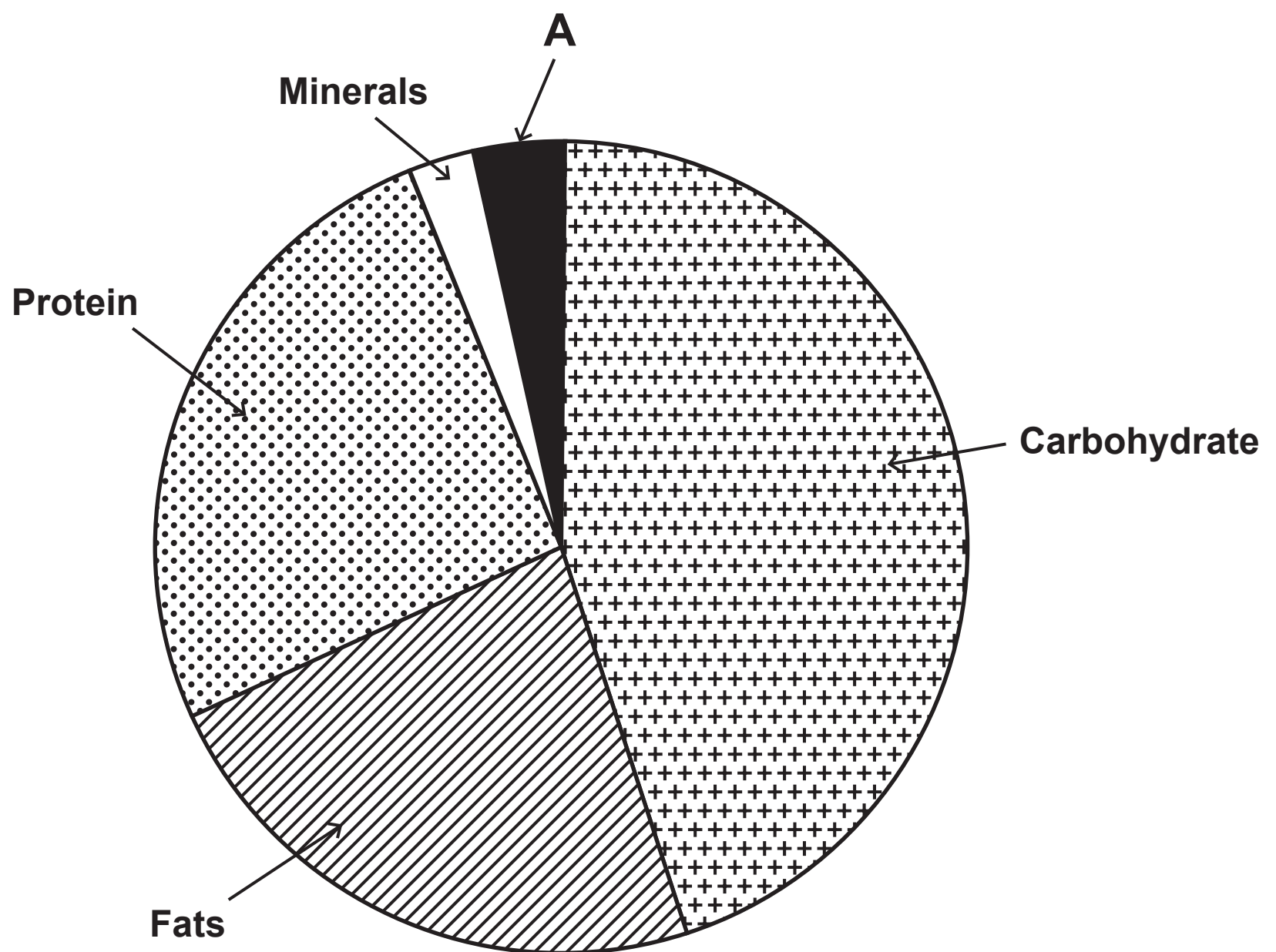
Question 2 (Spare copy)


TABLE 1

(a) Social benefit of regular participation	(b) How each social benefit is achieved
(1 mark)	(1 mark)
(1 mark)	(1 mark)

## Question 5(a)

FIGURE 2



**Question 6****FIGURE 3****Golf swing****FIGURE 4****Backstroke swimmer**



### Question 6(a)

## FIGURE 5

## Low organisation

## High organisation

---

---

(1 mark)

(1 mark)

### Question 6(a) (Spare copy)

## FIGURE 5

## Low organisation

## High organisation

(1 mark)	

<b>(1 mark)</b>
-----------------

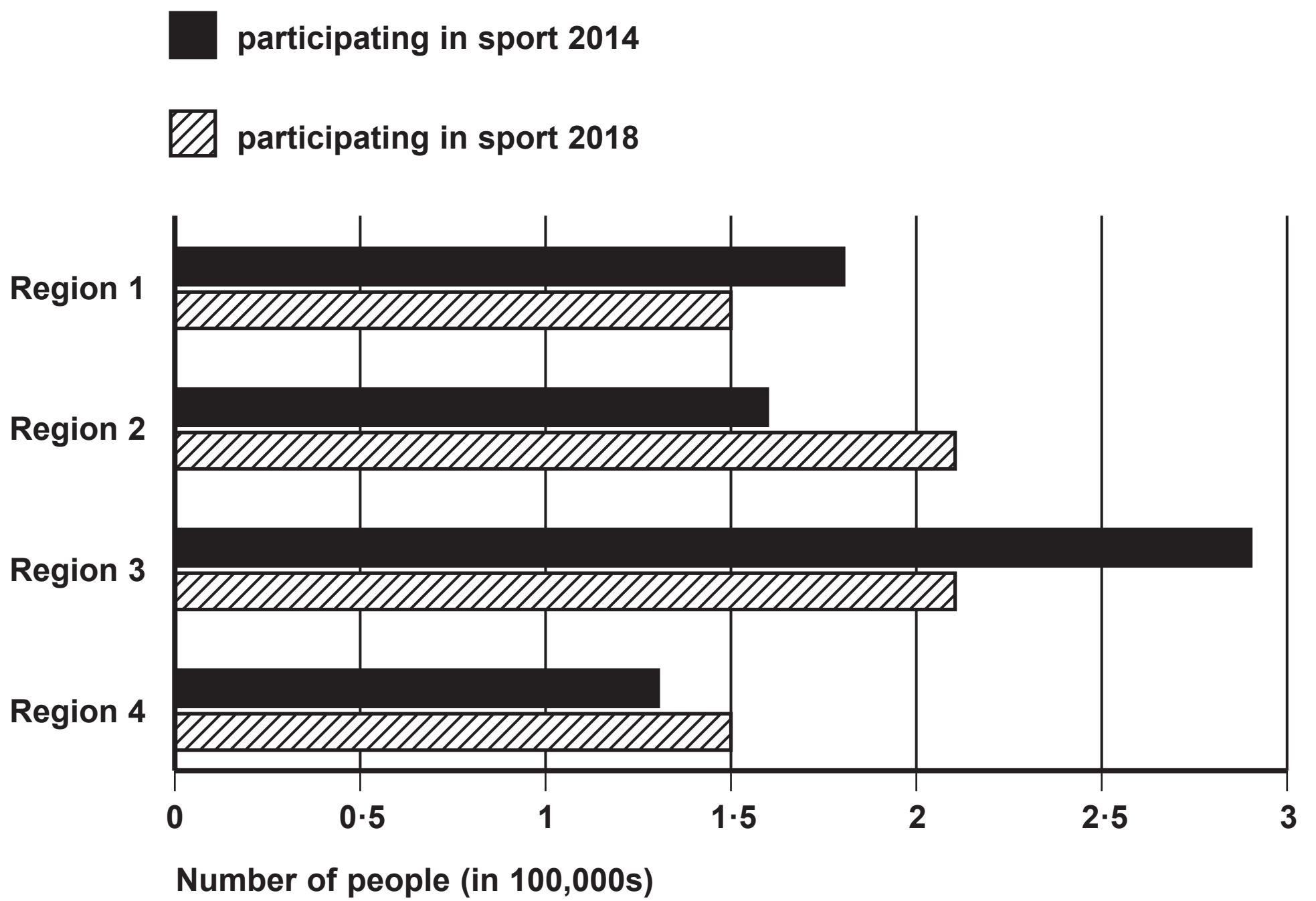
## Question 8

FIGURE 6



## Question 9

FIGURE 7



**Question 1(e) and 1(f)**

**(Source: Adapted from Office for National Statistics /**

**<https://www.ons.gov.uk/peoplepopulationandcommunity/culturalidentity/sexuality/bulletins/integratedhouseholdsurvey/2013-10-03>)**

**Question 6**

**(Source: © Daxiao Productions/Shutterstock)**

**(Source: © Boris Ryaposov/Shutterstock)**

**Question 8**

**(Source: © Sasha Samardzija/Shutterstock)**